

Please check the examination details below before entering your candidate information

Candidate surname

Other names

Centre Number

Candidate Number

--	--	--	--	--

--	--	--	--

## Pearson Edexcel International GCSE

Time 2 hours

Paper

reference

**4MA1/1HR**

### Mathematics A

**PAPER 1HR**

**Higher Tier**



**You must have:** Ruler graduated in centimetres and millimetres, protractor, pair of compasses, pen, HB pencil, eraser, calculator. Tracing paper may be used.

Total Marks

### Instructions

- Use **black** ink or ball-point pen.
- **Fill in the boxes** at the top of this page with your name, centre number and candidate number.
- Answer **all** questions.
- Without sufficient working, correct answers may be awarded no marks.
- Answer the questions in the spaces provided  
– *there may be more space than you need.*
- **Calculators may be used.**
- You must **NOT** write anything on the formulae page.  
Anything you write on the formulae page will gain NO credit.

### Information

- The total mark for this paper is 100.
- The marks for **each** question are shown in brackets  
– *use this as a guide as to how much time to spend on each question.*

### Advice

- Read each question carefully before you start to answer it.
- Check your answers if you have time at the end.

Turn over ►

P72438A

©2023 Pearson Education Ltd.

J:1/1/1/



P 7 2 4 3 8 A 0 1 2 8



Pearson

# International GCSE Mathematics

## Formulae sheet – Higher Tier

### Arithmetic series

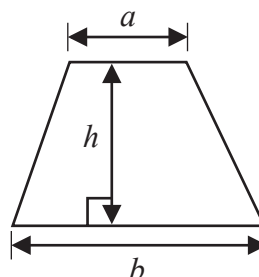
Sum to  $n$  terms,  $S_n = \frac{n}{2} [2a + (n-1)d]$

### The quadratic equation

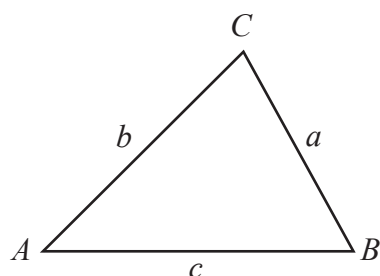
The solutions of  $ax^2 + bx + c = 0$  where  $a \neq 0$  are given by:

$$x = \frac{-b \pm \sqrt{b^2 - 4ac}}{2a}$$

Area of trapezium =  $\frac{1}{2}(a+b)h$



### Trigonometry



In any triangle  $ABC$

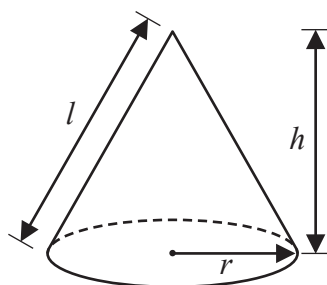
Sine Rule  $\frac{a}{\sin A} = \frac{b}{\sin B} = \frac{c}{\sin C}$

Cosine Rule  $a^2 = b^2 + c^2 - 2bc \cos A$

Area of triangle =  $\frac{1}{2}ab \sin C$

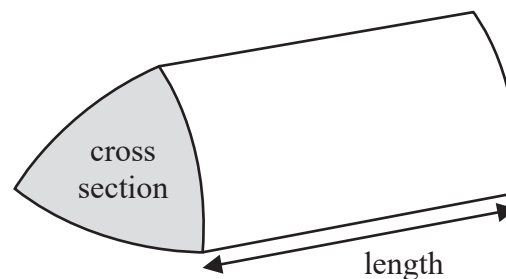
Volume of cone =  $\frac{1}{3}\pi r^2 h$

Curved surface area of cone =  $\pi r l$



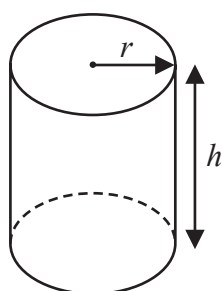
Volume of prism

= area of cross section  $\times$  length



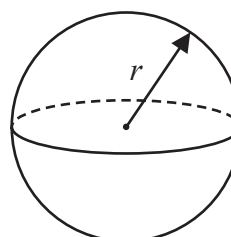
Volume of cylinder =  $\pi r^2 h$

Curved surface area of cylinder =  $2\pi r h$



Volume of sphere =  $\frac{4}{3}\pi r^3$

Surface area of sphere =  $4\pi r^2$



Answer ALL TWENTY FOUR questions.

Write your answers in the spaces provided.

You must write down all the stages in your working.

- 1 The table shows information about the frame size, in cm, of 60 bicycles sold in a shop.

Frame size ( $S$ cm)	Frequency
$30 < S \leq 36$	4
$36 < S \leq 42$	14
$42 < S \leq 48$	18
$48 < S \leq 54$	19
$54 < S \leq 60$	5

- (a) Write down the modal class.

.....  
(1)

- (b) Work out an estimate for the mean frame size.

..... cm  
(4)

(Total for Question 1 is 5 marks)



P 7 2 4 3 8 A 0 3 2 8

- 2 The diagram shows a solid triangular prism.

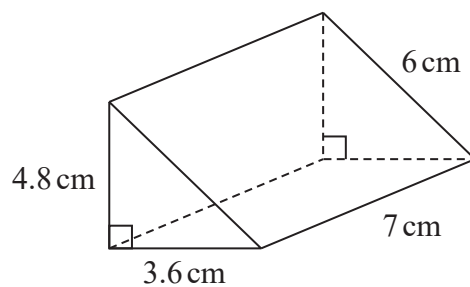


Diagram **NOT**  
accurately drawn

Work out the **total** surface area of the triangular prism.  
Give your answer correct to 3 significant figures.

..... cm<sup>2</sup>

(Total for Question 2 is 3 marks)



- 3 Here is a list of six numbers written in order of size.

$x$       5       $y$        $z$       10      12

The numbers have

a range of 9

a median of 8

a mode of 10

Find the value of  $x$ , the value of  $y$  and the value of  $z$

$x =$  .....

$y =$  .....

$z =$  .....

(Total for Question 3 is 3 marks)



- 4 Divya and Yuan each pay for a holiday at a special offer price.

**Divya's holiday**

Normal price: \$1600

Special offer:  
16% off the normal price

**Yuan's holiday**

Normal price: \$1400

Special offer:  
 $k\%$  off the normal price

The amount that Divya pays is the same as the amount that Yuan pays.

Work out the value of  $k$

$k = \dots\dots\dots$

(Total for Question 4 is 4 marks)



- 5  $C$  grams of chocolate is shared in the ratios  $2:5:8$   
The difference between the largest share and the smallest share is 390 grams.

Work out the value of  $C$

$C = \dots\dots\dots$

(Total for Question 5 is 3 marks)

- 6 Solve the simultaneous equations

$$\begin{aligned}x + 2y &= 15 \\ 4x - 6y &= 4\end{aligned}$$

Show clear algebraic working.

$x = \dots\dots\dots$

$y = \dots\dots\dots$

(Total for Question 6 is 3 marks)



7 (a) Write  $9.32 \times 10^{-5}$  as an ordinary number.

(1)

(b) Work out  $3 \times 10^5 - 6 \times 10^4$

Give your answer in standard form.

(2)

(c) Work out  $(3 \times 10^{55}) \times (6 \times 10^{65})$

Give your answer in standard form.

(2)

(Total for Question 7 is 5 marks)



8 (a) Factorise fully  $18c^3d^2 - 21c^2$

.....  
(2)

(b) (i) Factorise  $y^2 - 3y - 18$

.....  
(2)

(ii) Hence, solve  $y^2 - 3y - 18 = 0$

.....  
(1)

(Total for Question 8 is 5 marks)



- 9 The diagram shows an isosceles triangle  $ABC$

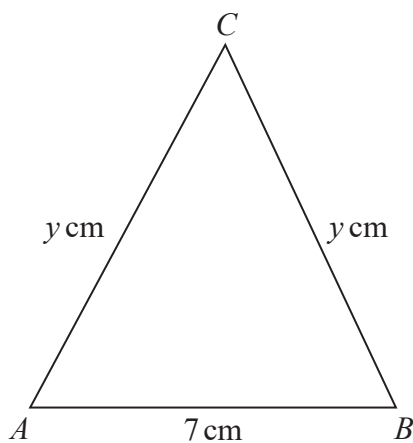


Diagram **NOT**  
accurately drawn

$$AB = 7 \text{ cm} \quad AC = BC = y \text{ cm}$$

The area of the triangle is  $42 \text{ cm}^2$

Work out the value of  $y$

$$y = \dots\dots\dots$$

(Total for Question 9 is 4 marks)

DO NOT WRITE IN THIS AREA

DO NOT WRITE IN THIS AREA

DO NOT WRITE IN THIS AREA



10  $R$  and  $T$  are points on a circle, centre  $O$

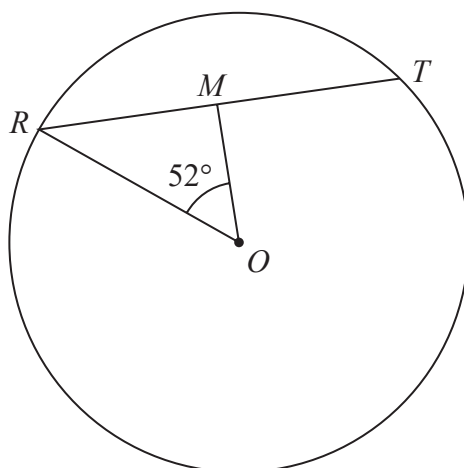


Diagram **NOT**  
accurately drawn

$$RT = 12 \text{ cm}$$

$M$  is the midpoint of  $RT$

$$\text{Angle } ROM = 52^\circ$$

Work out the area of the circle.

Give your answer correct to 3 significant figures.

.....  $\text{cm}^2$

(Total for Question 10 is 4 marks)

- 11 The table shows information about the times, in minutes, that 80 patients had to wait to see a doctor.

Time ( $W$ minutes)	Frequency
$0 < W \leq 10$	7
$10 < W \leq 20$	10
$20 < W \leq 30$	15
$30 < W \leq 40$	32
$40 < W \leq 50$	16

- (a) Complete the cumulative frequency table below.

Time ( $W$ minutes)	Cumulative frequency
$0 < W \leq 10$	
$0 < W \leq 20$	
$0 < W \leq 30$	
$0 < W \leq 40$	
$0 < W \leq 50$	

(1)

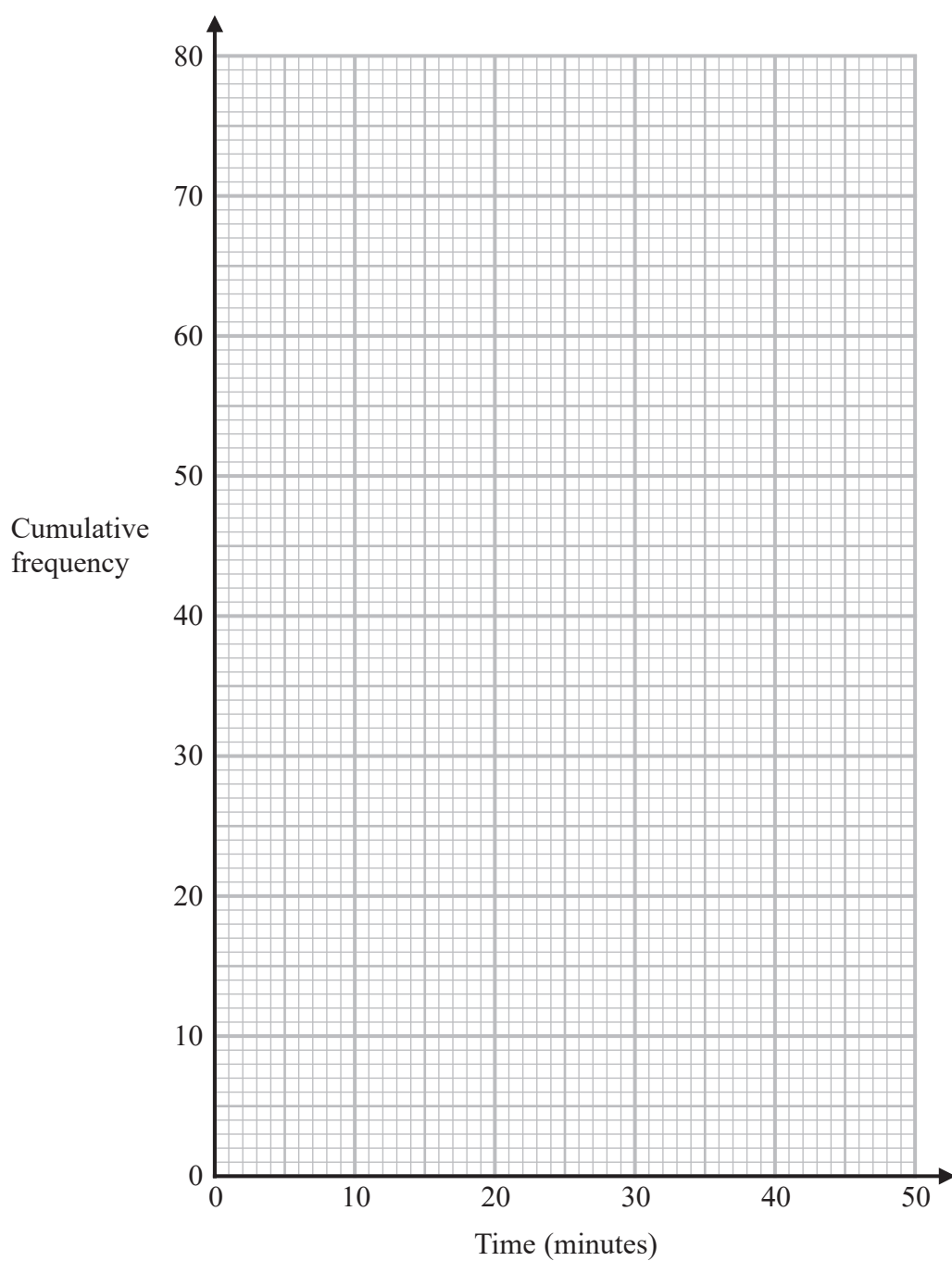
- (b) On the grid opposite, draw a cumulative frequency graph for your table.



DO NOT WRITE IN THIS AREA

DO NOT WRITE IN THIS AREA

DO NOT WRITE IN THIS AREA



(2)

(c) Use your graph to find an estimate for the median.

..... minutes  
(1)

(d) Use your graph to find an estimate for the interquartile range.

..... minutes  
(2)

(Total for Question 11 is 6 marks)



12 Solve  $2^{-4x} = 32$

$x = \dots\dots\dots$

(Total for Question 12 is 2 marks)

13 Use algebra to show that  $0.3\dot{8}\dot{1} = \frac{21}{55}$

(Total for Question 13 is 2 marks)



14  $T = \frac{p}{r}$

$p = 0.51$  correct to 2 significant figures.

$r = 6.3$  correct to 2 significant figures.

Work out the upper bound for the value of  $T$   
Show your working clearly.

(Total for Question 14 is 2 marks)

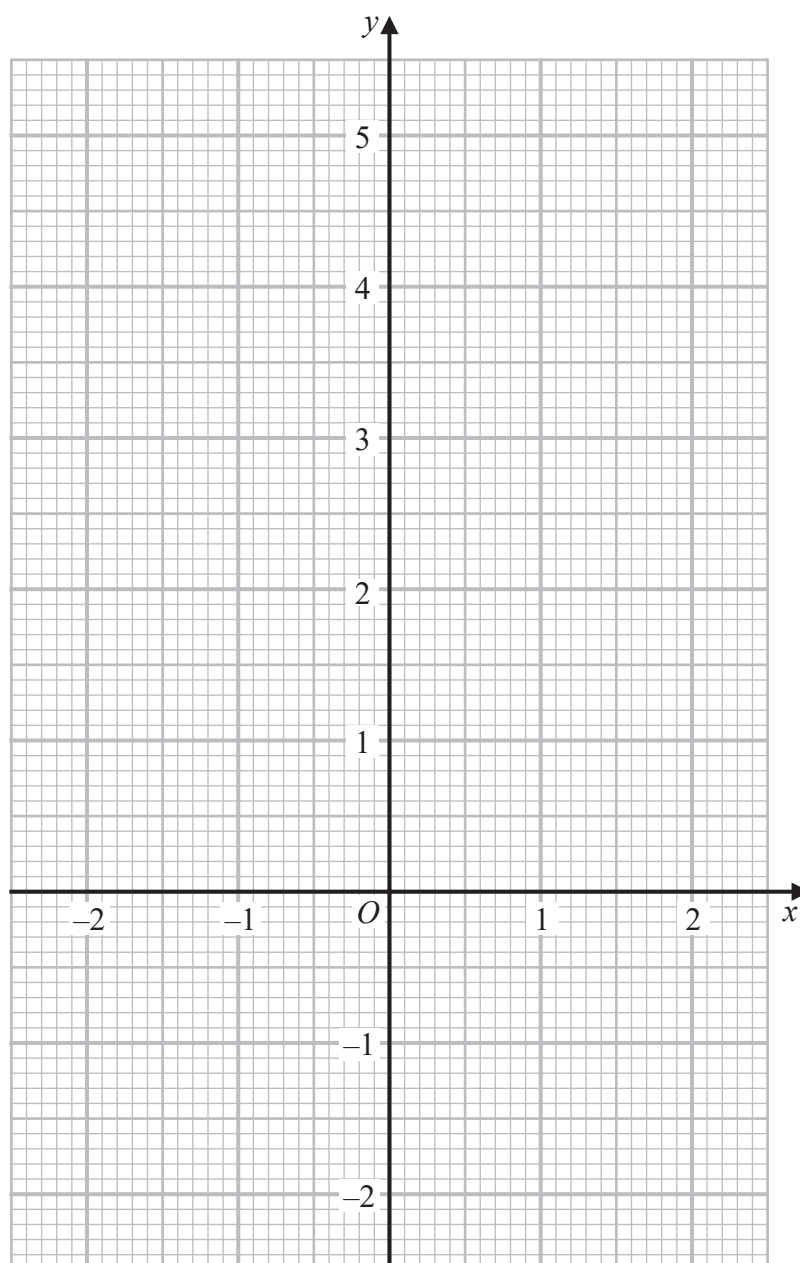


15 (a) Complete the table of values for  $y = x^3 - 3x + 2$

$x$	-2	-1	-0.5	0	1	1.5	2
$y$		4	3.4		0	0.9	

(2)

(b) On the grid, draw the graph of  $y = x^3 - 3x + 2$  for values of  $x$  from -2 to 2



(2)



- (c) By drawing a suitable straight line on the grid, use your graph to find an estimate for the solution of

$$2x^3 - 3x + 4 = 0$$

Give your answer correct to one decimal place.

.....  
(3)

(Total for Question 15 is 7 marks)



16 The function  $f$  is such that

$$f(x) = \frac{2}{3x-5} \quad \text{where } x \neq \frac{5}{3}$$

(a) Find  $f\left(\frac{1}{3}\right)$

.....  
(1)

(b) Find  $f^{-1}(x)$

$f^{-1}(x) =$  .....  
(2)

The function  $g$  is such that

$$g(x) = 5x^2 - 20x + 23$$

(c) Express  $g(x)$  in the form  $a(x-b)^2 + c$

.....  
(3)

(Total for Question 16 is 6 marks)



17

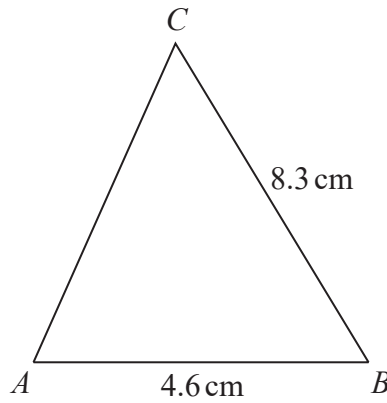


Diagram **NOT**  
accurately drawn

$AB = 4.6 \text{ cm}$        $BC = 8.3 \text{ cm}$       angle  $ABC$  is acute

The area of triangle  $ABC$  is  $12 \text{ cm}^2$

Work out the perimeter of triangle  $ABC$   
Give your answer correct to 3 significant figures.

..... cm

(Total for Question 17 is 5 marks)



18 Solve  $\sqrt{3}(x - 2\sqrt{3}) = x + 2\sqrt{3}$

Give your answer in the form  $a + b\sqrt{3}$  where  $a$  and  $b$  are integers.  
Show your working clearly.

$x = \dots\dots\dots$

(Total for Question 18 is 4 marks)



19  $P$  is inversely proportional to  $y^2$

When  $y = 4$ ,  $P = a$

(a) Find a formula for  $P$  in terms of  $y$  and  $a$

.....  
(3)

Given also that  $y$  is directly proportional to  $\sqrt{x}$   
and when  $x = a$ ,  $P = 4a$

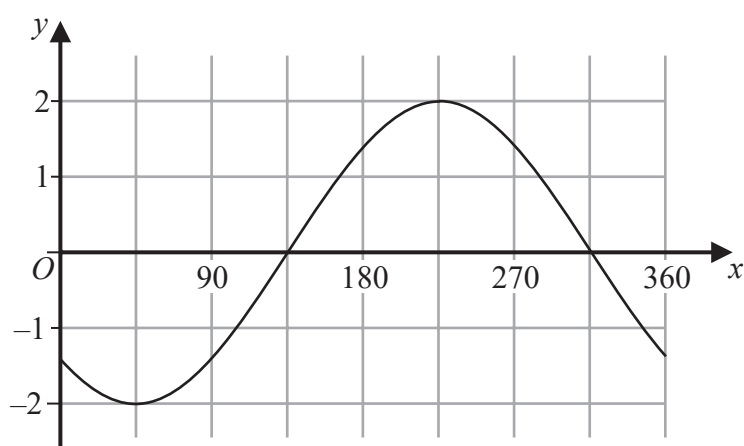
(b) find a formula for  $P$  in terms of  $x$  and  $a$

.....  
(3)

(Total for Question 19 is 6 marks)



20 Here is a sketch of the curve  $y = a \cos(x + b)^\circ$  for  $0 \leq x \leq 360$



Given that  $0 < b < 180$

find the value of  $a$  and the value of  $b$

$a = \dots\dots\dots$

$b = \dots\dots\dots$

(Total for Question 20 is 2 marks)



- 21 The diagram shows a triangular prism,  $ABCDEF$ , with a rectangular base  $ABCD$

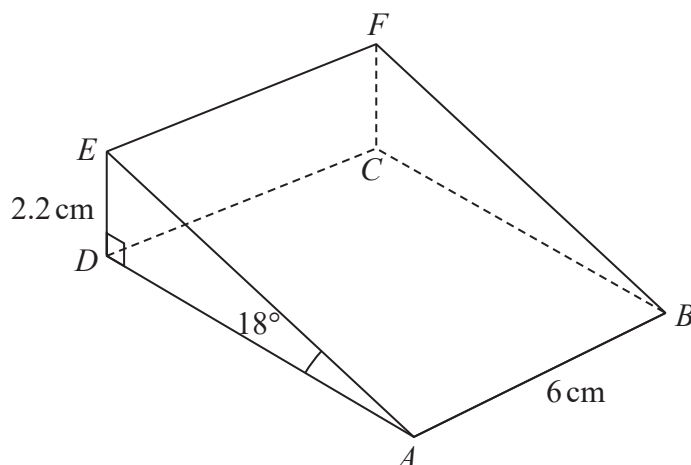


Diagram **NOT**  
accurately drawn

$$AB = 6 \text{ cm}$$

$$DE = 2.2 \text{ cm}$$

$$\text{angle } DAE = 18^\circ$$

$$\text{angle } ADE = 90^\circ$$

Work out the angle that  $BE$  makes with the plane  $ABCD$   
Give your answer correct to one decimal place.

(Total for Question 21 is 4 marks)

22 The diagram shows triangle  $OAB$  with  $OA$  extended to  $E$

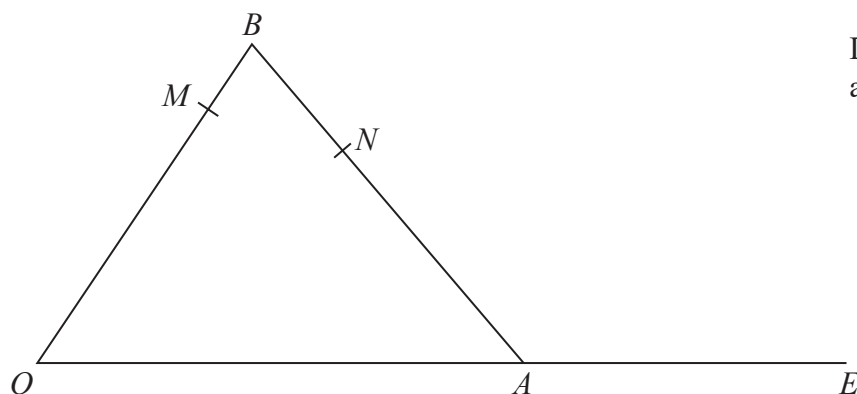


Diagram **NOT**  
accurately drawn

$$\vec{OA} = \mathbf{a} \quad \vec{OB} = \mathbf{b}$$

$M$  is the point on  $OB$  such that  $OM:MB = 4:1$

$N$  is the point on  $AB$  such that  $AN:NB = 3:2$

$OA:AE = 5:3$

- (a) Find an expression for  $\vec{ON}$  in terms of  $\mathbf{a}$  and  $\mathbf{b}$   
Give your answer in its simplest form.

$$\vec{ON} = \dots\dots\dots (2)$$

DO NOT WRITE IN THIS AREA

DO NOT WRITE IN THIS AREA

DO NOT WRITE IN THIS AREA



DO NOT WRITE IN THIS AREA

DO NOT WRITE IN THIS AREA

DO NOT WRITE IN THIS AREA

(b) Use a vector method to show that  $MNE$  is a straight line.

(3)

(Total for Question 22 is 5 marks)



- 23  $G$  is the point on the curve with equation  $y = 8x^2 - 14x - 6$  where the gradient is 10  
The straight line **Q** passes through the point  $G$  and is perpendicular to the tangent at  $G$

Find an equation for **Q**

Give your answer in the form  $ax + by + c = 0$  where  $a$ ,  $b$  and  $c$  are integers.

(Total for Question 23 is 5 marks)



- 24 An arithmetic sequence has first term 8 and common difference 11  
The sequence has  $k$  terms, where  $k > 21$

The sum of the last 20 terms of the sequence is 10 170

Find the value of  $k$

Show clear algebraic working.

$k = \dots\dots\dots$

(Total for Question 24 is 5 marks)

TOTAL FOR PAPER = 100 MARKS



DO NOT WRITE IN THIS AREA

DO NOT WRITE IN THIS AREA

DO NOT WRITE IN THIS AREA

**BLANK PAGE**

